












NAVN: _____

MATEMATIK HENTEDIKTAT

100'er venner

1		
2		
3		
4		
5		
6		
7		
8		
9		
10		
11		

1



$$0 + 100 = 100$$

@ACWeber

2



$$10 + 90 = 100$$

@ACWeber

3



$$20 + 80 = 100$$

@ACWeber

4



$$30 + 70 = 100$$

@ACWeber


5



$$40 + 60 = 100$$

@ACWeber


6



$$50 + 50 = 100$$

@ACWeber

7



$$60 + 40 = 100$$

@ACWeber

8



$$70 + 30 = 100$$

@ACWeber

9



$$80 + 20 = 100$$

@ACWeber


10



$$90 + 10 = 100$$

@ACWeber

11



$$100 + 0 = 100$$

@ACWeber

Hentediktaten er inspireret af Maria Grove Christensens hentediktat med pluspar.

Find flere ideer på
<http://grovechristensen.dk>