












NAVN: _____

MATEMATIK HENTEDIKTAT

Store pluspar

1		
2		
3		
4		
5		
6		
7		
8		
9		
10		

1



$$10 + 10 = 20$$

@ACWeber

2



$$20 + 20 = 40$$

@ACWeber

3



$$30 + 30 = 60$$

@ACWeber

4



$$40 + 40 = 80$$

@ACWeber

5



$$50 + 50 = 100$$

@ACWeber


6



$$60 + 60 = 120$$

@ACWeber

7



$$70 + 70 = 140$$

@ACWeber

8



$$80 + 80 = 160$$

@ACWeber

9



$$90 + 90 = 180$$

@ACWeber

10



$$100 + 100 = 200$$

@ACWeber

Hentediktaten er inspireret af Maria Grove Christensens hentediktat med pluspar.

Find flere ideer på
<http://grovechristensen.dk>